

9000보다 1000 큰 수는?

$$\begin{array}{r} 9000 \\ + 1000 \\ \hline 10000 \end{array}$$

9900보다 100 큰 수는?

$$\begin{array}{r} 9900 \\ + 100 \\ \hline \end{array}$$

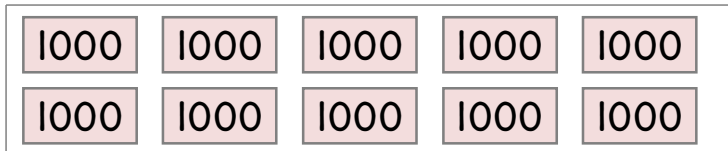
9990보다 10 큰 수는?

$$\begin{array}{r} 9990 \\ + 10 \\ \hline \end{array}$$

9999보다 1 큰 수는?

$$\begin{array}{r} 9999 \\ + 1 \\ \hline \end{array}$$

1000 이 10개



쓰기 : 1만, 10000

읽기 : 만, 일만

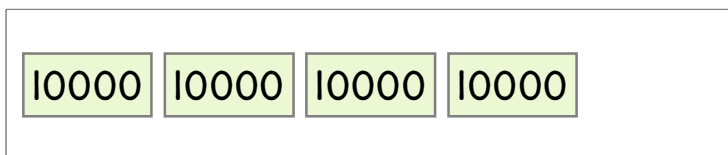
10000 이 2개



쓰기 : \_\_\_\_\_

읽기 : \_\_\_\_\_

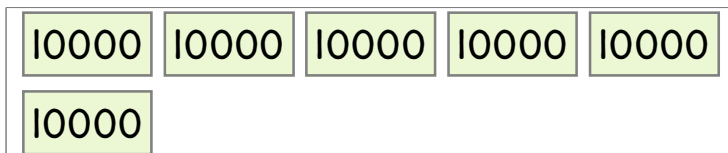
10000 이 4개



쓰기 : \_\_\_\_\_

읽기 : \_\_\_\_\_


10000 이 6개



쓰기 : \_\_\_\_\_

읽기 : \_\_\_\_\_

10000 이 8개



쓰기 : \_\_\_\_\_

읽기 : \_\_\_\_\_

