

8000보다 2000 큰 수는?

$$\begin{array}{r} 8000 \\ + 2000 \\ \hline 10000 \end{array}$$

7000보다 3000 큰 수는?

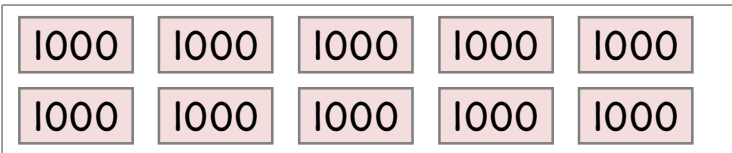
$$\begin{array}{r} 7000 \\ + 3000 \\ \hline \end{array}$$

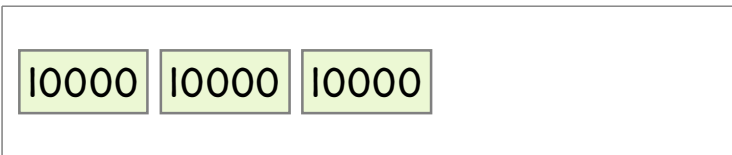
9950보다 50 큰 수는?

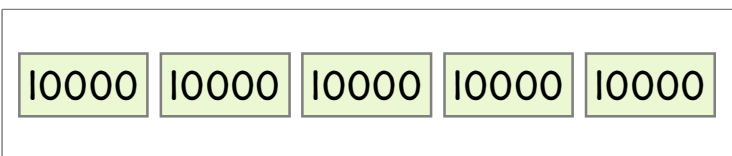
$$\begin{array}{r} 9950 \\ + 50 \\ \hline \end{array}$$

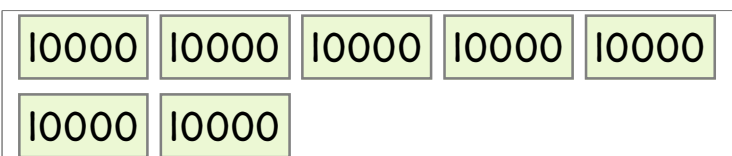
9995보다 5 큰 수는?

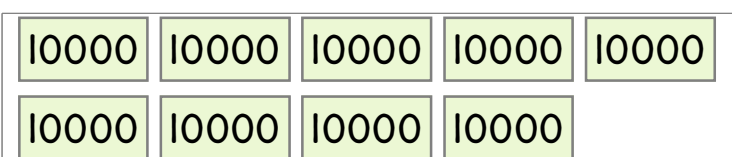
$$\begin{array}{r} 9995 \\ + 5 \\ \hline \end{array}$$

1000 이 10개  쓰기 : 1만, 10000
읽기 : 만, 일만

10000 이 3개  쓰기 : _____
읽기 : _____

10000 이 5개  쓰기 : _____
읽기 : _____

10000 이 7개  쓰기 : _____
읽기 : _____

10000 이 9개  쓰기 : _____
읽기 : _____

