



☺ 선분이란? _____

☺ 선분이 몇 개 있는지 쓰세요.




_____ 개




_____ 개



_____ 개



_____ 개




_____ 개



_____ 개

☺ 선분 3개로 둘러싸인 도형을 그려 보세요.



☺ 선분 4개로 둘러싸인 도형을 그려 보세요.

