




☺ 직각이 몇 개인지 쓰세요.




\_\_\_\_\_ 개




\_\_\_\_\_ 개




\_\_\_\_\_ 개



\_\_\_\_\_ 개




\_\_\_\_\_ 개




\_\_\_\_\_ 개


☺ 직각이 1개 있는 삼각형을 그려 보세요.



☺ 직각이 1개 있는 사각형을 그려 보세요.



☺ 직각이 2개 있는 사각형을 그려 보세요.



☺ 직각이 4개 있는 사각형을 그려 보세요.

