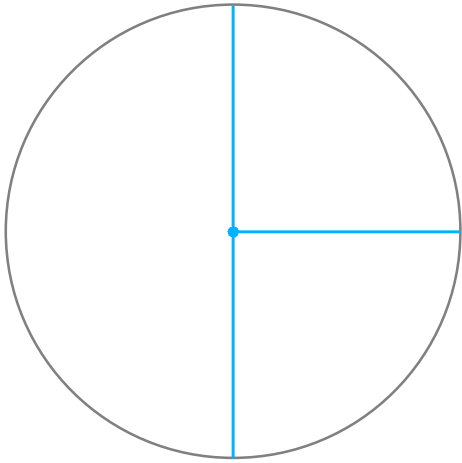




☺ 원의 지름과 반지름을 한 개씩 그리세요. 그리고 각각의 길이를 재어 보세요.




지름 : 6 cm  
반지름 : \_\_\_\_\_ cm




지름 : \_\_\_\_\_ cm  
반지름 : \_\_\_\_\_ cm



지름 : \_\_\_\_\_ cm  
반지름 : \_\_\_\_\_ cm



지름 : \_\_\_\_\_ cm  
반지름 : \_\_\_\_\_ cm



지름 : \_\_\_\_\_ cm  
반지름 : \_\_\_\_\_ cm

