

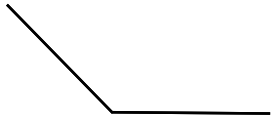
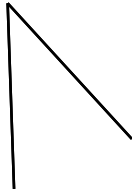


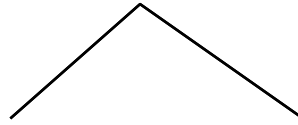
☺ 직각보다 작은 각에  하고, 직각보다 큰 각에  하세요.



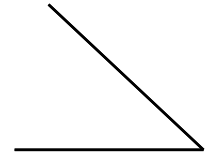
(            )



(            )



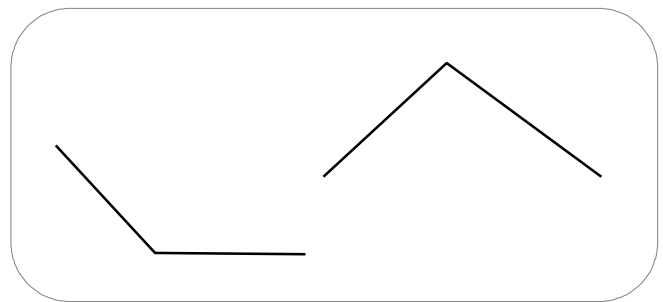
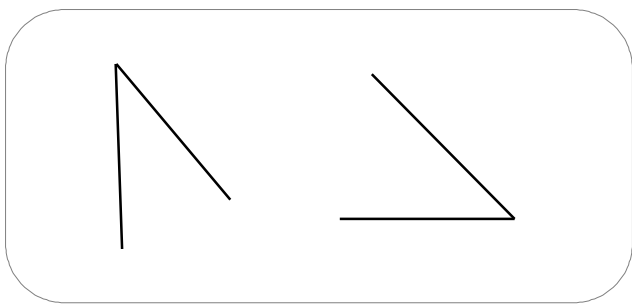
(            )



(            )

☺ 직각보다 작은 각을 예각 이라고 합니다.

☺ 직각보다 크고 180°보다 작은 각을 둔각 이라고 합니다.



☺ 예각에는 '예각'이라고 쓰고, 둔각에는 '둔각'이라고 쓰세요.

