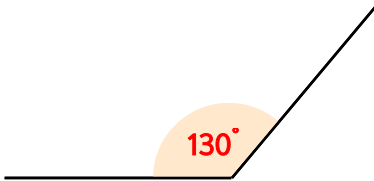
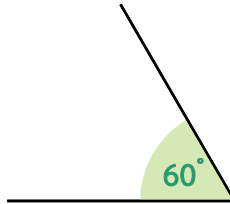
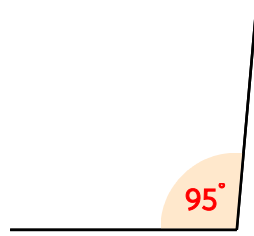
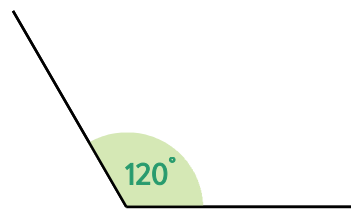


☺ 각도의 합과 차를 구하세요.

|   |   |   |
|---|---|---|
|   |   | $130^\circ + 60^\circ = \underline{\hspace{2cm}}$ |
|   |   | $130^\circ - 60^\circ = \underline{\hspace{2cm}}$ |
|  |  | $95^\circ + 120^\circ = \underline{\hspace{2cm}}$ |
|   |   | $120^\circ - 95^\circ = \underline{\hspace{2cm}}$ |

$140^\circ + 60^\circ = \underline{\hspace{2cm}}$

$88^\circ + 100^\circ = \underline{\hspace{2cm}}$

$140^\circ - 60^\circ = \underline{\hspace{2cm}}$

$100^\circ - 88^\circ = \underline{\hspace{2cm}}$

