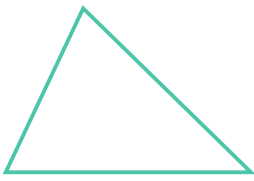
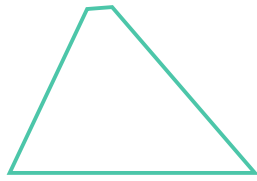


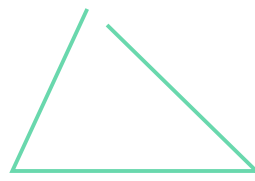
☺ 선분 3개로 둘러싸인 도형에 모두 ○ 하세요.




(○)



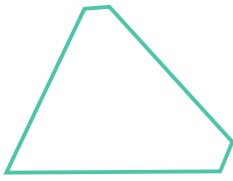
()



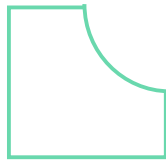
()




()



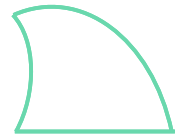
()



()



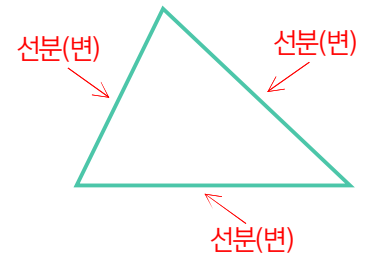
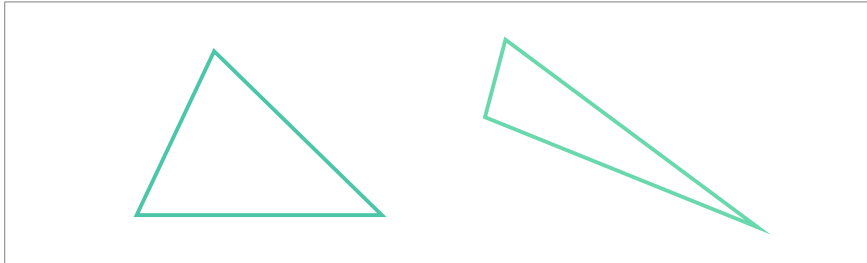
()



()

* 문장을 소리 내어 읽고 따라 쓰세요.

☺ 선분 3개로 둘러싸인 도형을 삼각형 이라고 합니다.

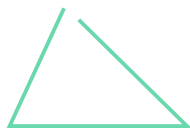


* 평면도형을 이루는 선분을 **변**이라고 합니다.

☺ 삼각형이 아닌 이유에 ○ 하세요.



(선분 3개가 아니다, 둘러싸인 도형이 아니다)



(선분 3개가 아니다, 둘러싸인 도형이 아니다)



(선분 3개가 아니다, 둘러싸인 도형이 아니다)

