

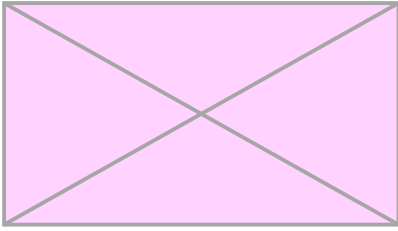
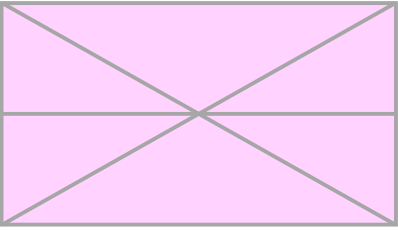
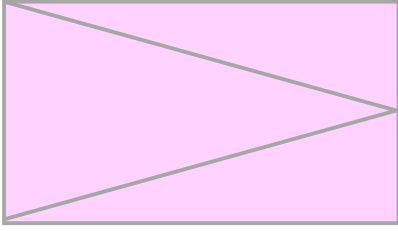
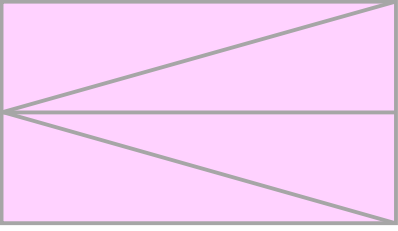
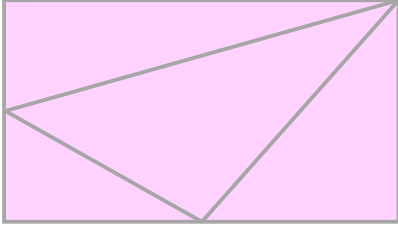
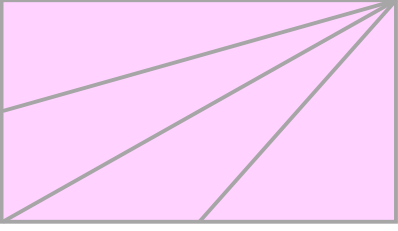
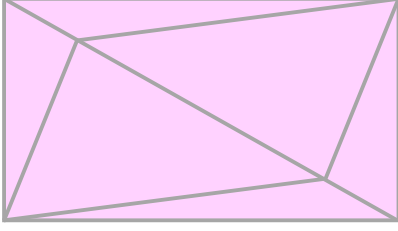
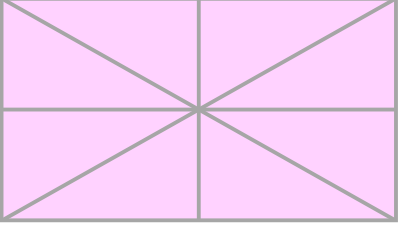


☺ 도화지를 선을 따라 잘랐을 때 예각삼각형, 둔각삼각형, 직각삼각형이 각각 몇 개씩 만들어지는지 세어 보세요. (해당하는 삼각형이 없으면 0개라고 쓰세요.)

 <p>예각삼각형 : ___개 둔각삼각형 : ___개 직각삼각형 : ___개</p>	 <p>예각삼각형 : ___개 둔각삼각형 : ___개 직각삼각형 : ___개</p>
 <p>예각삼각형 : ___개 둔각삼각형 : ___개 직각삼각형 : ___개</p>	 <p>예각삼각형 : ___개 둔각삼각형 : ___개 직각삼각형 : ___개</p>
 <p>예각삼각형 : ___개 둔각삼각형 : ___개 직각삼각형 : ___개</p>	 <p>예각삼각형 : ___개 둔각삼각형 : ___개 직각삼각형 : ___개</p>
 <p>예각삼각형 : ___개 둔각삼각형 : ___개 직각삼각형 : ___개</p>	 <p>예각삼각형 : ___개 둔각삼각형 : ___개 직각삼각형 : ___개</p>
 <p>예각삼각형 : ___개 둔각삼각형 : ___개 직각삼각형 : ___개</p>	 <p>예각삼각형 : ___개 둔각삼각형 : ___개 직각삼각형 : ___개</p>

