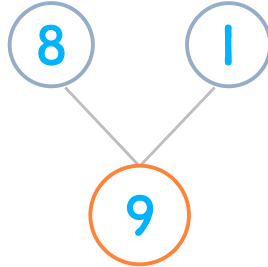



☺ 그림을 보고 모으기를 완성하세요. 그리고 덧셈식을 쓰고 읽어 보세요.

사탕 8개와 1개를 합하면 모두 몇 개일까요?



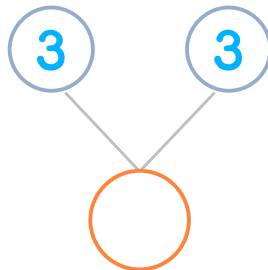
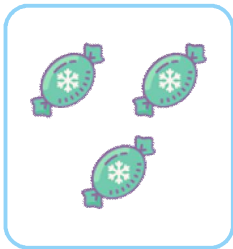

$$8 + 1 = 9$$

읽기

8 더하기 1은 9와 같습니다.

8과 1의 합은 9입니다.

사탕 3개와 3개를 합하면 모두 몇 개일까요?

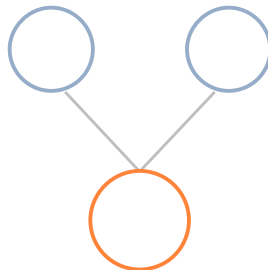




$$3 + 3 = \underline{\quad}$$

읽기

소리내어 읽고 ✓ 하세요.

사탕 6개와 2개를 합하면 모두 몇 개일까요?

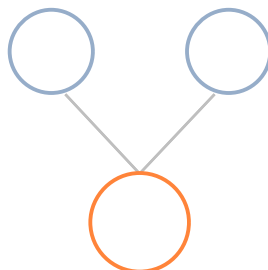




$$\underline{\quad} + \underline{\quad} = \underline{\quad}$$

읽기

소리내어 읽고 ✓ 하세요.

사탕 2개와 5개를 합하면 모두 몇 개일까요?



$$\underline{\quad} + \underline{\quad} = \underline{\quad}$$

읽기

소리내어 읽고 ✓ 하세요.



정답