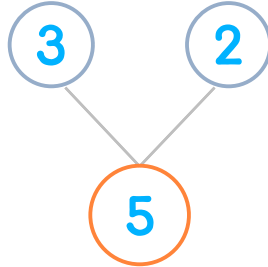



☺ 그림을 보고 모으기를 완성하세요. 그리고 덧셈식을 쓰고 읽어 보세요.

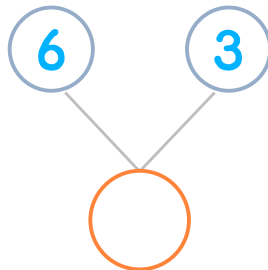

컵 3개와 2개를 합하면 모두 몇 개일까요?



$$3 + 2 = 5$$

읽기
3 더하기 2는 5와 같습니다.
3과 2의 합은 5입니다.

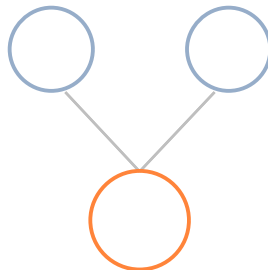

컵 6개와 3개를 합하면 모두 몇 개일까요?



$$6 + 3 = \underline{\quad}$$

읽기
소리내어 읽고 ✓ 하세요.

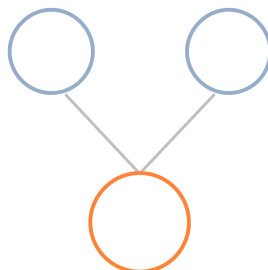

컵 2개와 6개를 합하면 모두 몇 개일까요?



$$\underline{\quad} + \underline{\quad} = \underline{\quad}$$

읽기
소리내어 읽고 ✓ 하세요.

컵 5개와 4개를 합하면 모두 몇 개일까요?



$$\underline{\quad} + \underline{\quad} = \underline{\quad}$$

읽기
소리내어 읽고 ✓ 하세요.

