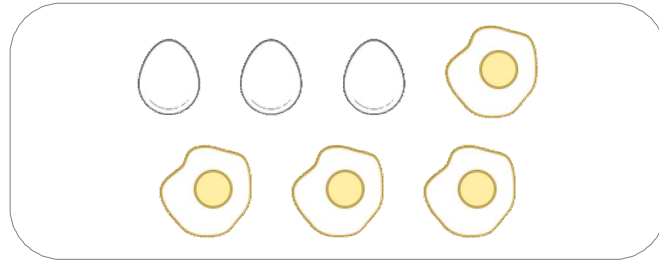


☺ 그림을 보고 덧셈식과 뺄셈식으로 나타내세요.



삶은 달걀과 달걀프라이의 수를 합하면?

$$3 + 4 = 7$$

덧셈식

또는

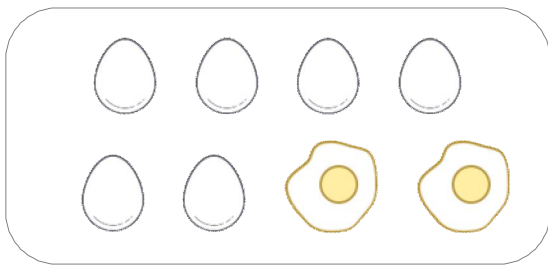
$$4 + 3 = 7$$

달걀 전체 중에서 달걀프라이의 수는?

뺄셈식  $7 - 3 = 4$

달걀 전체 중에서 삶은 달걀의 수는?

뺄셈식  $7 - 4 = 3$

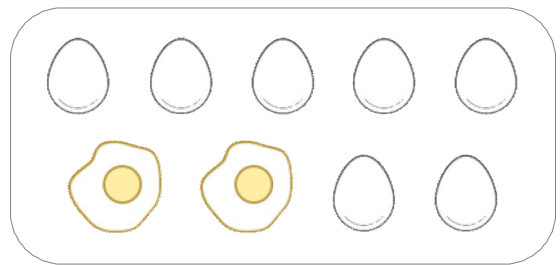


$$\underline{\quad} + \underline{\quad} = \underline{\quad}$$

$$\underline{\quad} + \underline{\quad} = \underline{\quad}$$

$$\underline{\quad} - \underline{\quad} = \underline{\quad}$$

$$\underline{\quad} - \underline{\quad} = \underline{\quad}$$



$$\underline{\quad} + \underline{\quad} = \underline{\quad}$$

$$\underline{\quad} + \underline{\quad} = \underline{\quad}$$

$$\underline{\quad} - \underline{\quad} = \underline{\quad}$$

$$\underline{\quad} - \underline{\quad} = \underline{\quad}$$

