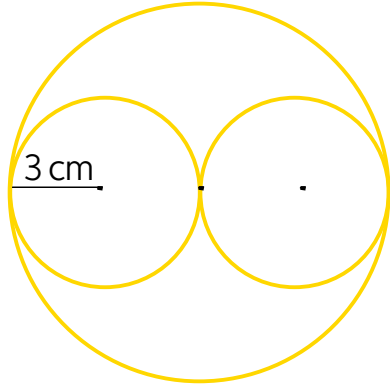
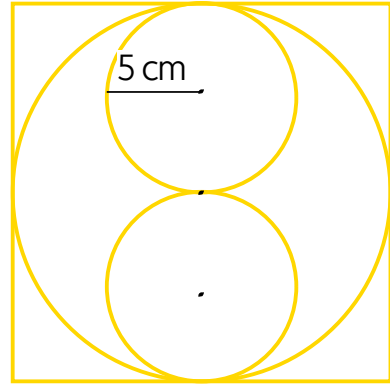


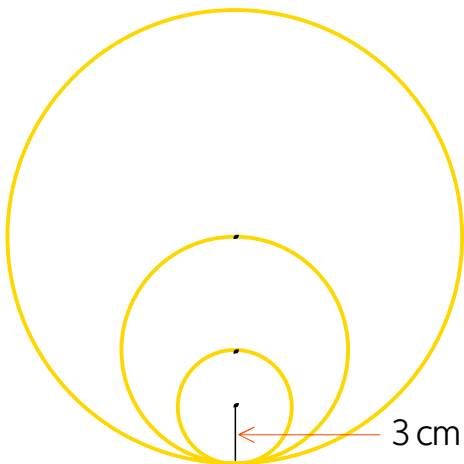
☺ 도형을 보고 해당하는 길이를 구하세요.



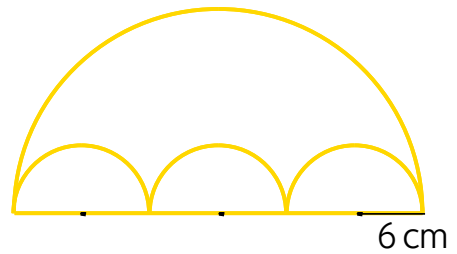
큰 원의 반지름 : _____ cm



정사각형의 한 변 : _____ cm



가장 큰 원의 지름 : _____ cm



가장 큰 원의 반지름 : _____ cm

