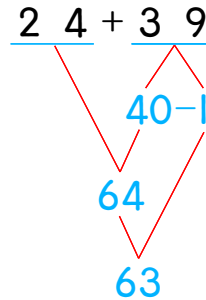
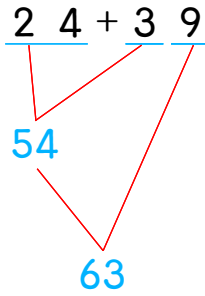
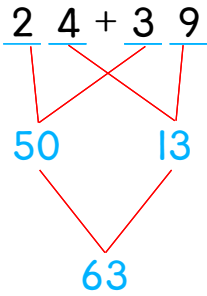


☺ 주어진 덧셈을 여러 가지 방법으로 계산해 보세요.  
 다음의 방법을 사용하거나 새로운 방법으로 계산해 보세요.



**34 + 19**

--	--

**45 + 28**

--	--

