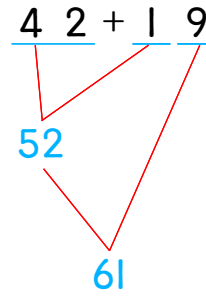
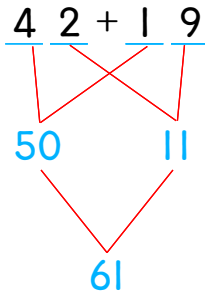
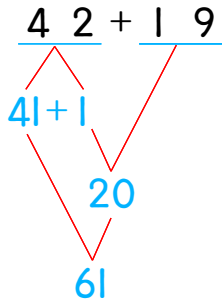


☺ 주어진 덧셈을 여러 가지 방법으로 계산해 보세요.

다음의 방법을 사용하거나 새로운 방법으로 계산해 보세요.



32 + 39

--	--

43 + 59

--	--

