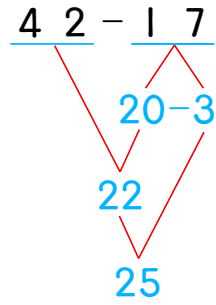
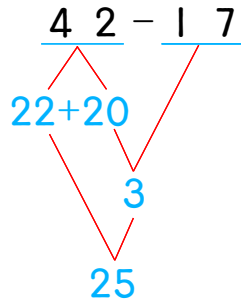
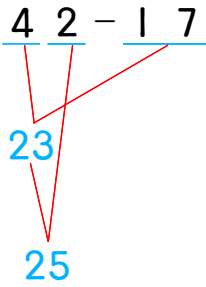


☺ 주어진 덧셈을 여러 가지 방법으로 계산해 보세요.
 다음의 방법을 사용하거나 새로운 방법으로 계산해 보세요.



42 - 27

--	--

73 - 18

--	--

