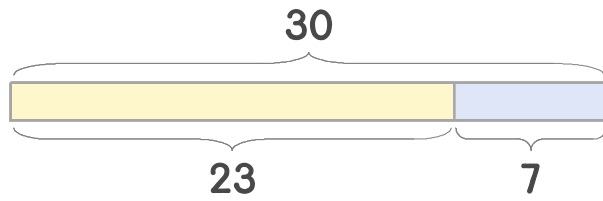


☺ 그림을 보고 덧셈식과 뺄셈식으로 나타내세요.



**덧셈식**  $23 + 7 = 30$

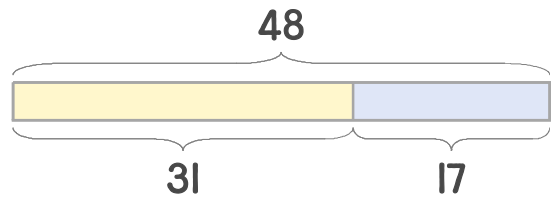
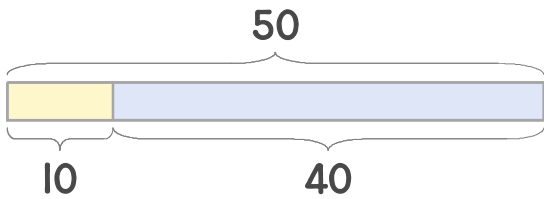
**뺄셈식**  $30 - 7 = 23$

또는

**덧셈식**

$7 + 23 = 30$

**뺄셈식**  $30 - 23 = 7$



$\underline{\quad} + \underline{\quad} = \underline{\quad}$

$\underline{\quad} + \underline{\quad} = \underline{\quad}$

$\underline{\quad} + \underline{\quad} = \underline{\quad}$

$\underline{\quad} + \underline{\quad} = \underline{\quad}$

$\underline{\quad} - \underline{\quad} = \underline{\quad}$

$\underline{\quad} - \underline{\quad} = \underline{\quad}$

$\underline{\quad} - \underline{\quad} = \underline{\quad}$

$\underline{\quad} - \underline{\quad} = \underline{\quad}$

