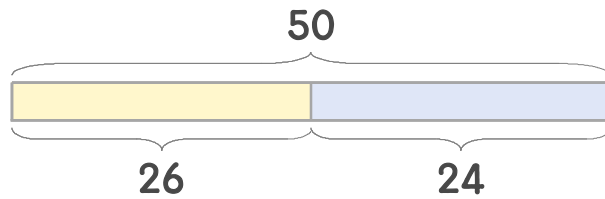


☺ 그림을 보고 덧셈식과 뺄셈식으로 나타내세요.



$$26 + 24 = 50$$

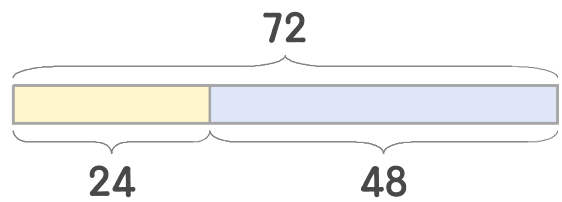
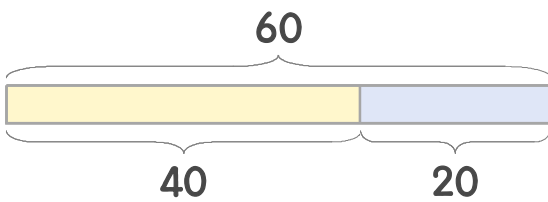
뺄셈식 $50 - 24 = 26$

덧셈식

또는

$$24 + 26 = 50$$

뺄셈식 $50 - 26 = 24$



$$\underline{\quad} + \underline{\quad} = \underline{\quad}$$

$$\underline{\quad} + \underline{\quad} = \underline{\quad}$$

$$\underline{\quad} + \underline{\quad} = \underline{\quad}$$

$$\underline{\quad} + \underline{\quad} = \underline{\quad}$$

$$\underline{\quad} - \underline{\quad} = \underline{\quad}$$

$$\underline{\quad} - \underline{\quad} = \underline{\quad}$$

$$\underline{\quad} - \underline{\quad} = \underline{\quad}$$

$$\underline{\quad} - \underline{\quad} = \underline{\quad}$$

