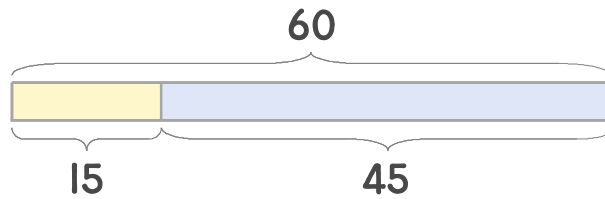


☺ 그림을 보고 덧셈식과 뺄셈식으로 나타내세요.



$$15 + 45 = 60$$

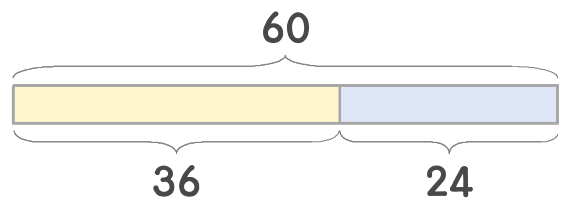
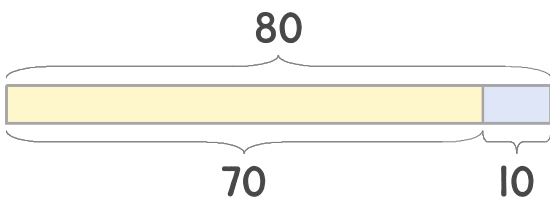
**뺄셈식**  $60 - 45 = 15$

**덧셈식**

또는

$$45 + 15 = 60$$

**뺄셈식**  $60 - 15 = 45$



$$\underline{\quad} + \underline{\quad} = \underline{\quad}$$

$$\underline{\quad} + \underline{\quad} = \underline{\quad}$$

$$\underline{\quad} + \underline{\quad} = \underline{\quad}$$

$$\underline{\quad} + \underline{\quad} = \underline{\quad}$$

$$\underline{\quad} - \underline{\quad} = \underline{\quad}$$

$$\underline{\quad} - \underline{\quad} = \underline{\quad}$$

$$\underline{\quad} - \underline{\quad} = \underline{\quad}$$

$$\underline{\quad} - \underline{\quad} = \underline{\quad}$$

