



☺ 오이의 개수를 곱셈식으로 나타내세요.




$$4 + 4 + 4 + 4 + 4 = 20$$

$$4 \times 5 = 20$$




$$3 + 3 + 3 + 3 = 12$$

$$3 \times \underline{\quad} = \underline{\quad}$$



$$6 + 6 + 6 + 6 + 6 = 30$$

$$6 \times \underline{\quad} = \underline{\quad}$$



$$9 + 9 = 18$$

$$9 \times \underline{\quad} = \underline{\quad}$$

☺ 다음을 곱셈식으로 나타내세요.

$$5 + 5 + 5 + 5 = 20$$

$$\rightarrow 5 \times \underline{4} = \underline{20}$$

$$7 + 7 + 7 + 7 = 28$$

$$\rightarrow \underline{\quad} \times \underline{\quad} = \underline{\quad}$$

4를 9번 더한 값은 36입니다.

$$\rightarrow 4 \times \underline{\quad} = \underline{\quad}$$

3을 8번 더한 값은 24입니다.

$$\rightarrow \underline{\quad} \times \underline{\quad} = \underline{\quad}$$

6의 7배는 42입니다.

$$\rightarrow 6 \times \underline{\quad} = \underline{\quad}$$

7의 9배는 63입니다.

$$\rightarrow \underline{\quad} \times \underline{\quad} = \underline{\quad}$$

