

☺ 연필의 수를 곱셈식으로 나타내세요.



$$3 \times 2 = 6$$




$$3 \times \underline{\quad} = \underline{\quad}$$




$$3 \times \underline{\quad} = \underline{\quad}$$



$$3 \times \underline{\quad} = \underline{\quad}$$




$$3 \times \underline{\quad} = \underline{\quad}$$



$$3 \times \underline{\quad} = \underline{\quad}$$



$$3 \times \underline{\quad} = \underline{\quad}$$



$$3 \times \underline{\quad} = \underline{\quad}$$