

☺ 바나나의 수를 곱셈식으로 나타내세요.




$$4 \times \underline{3} = \underline{12}$$




$$4 \times \underline{\quad} = \underline{\quad}$$




$$4 \times \underline{\quad} = \underline{\quad}$$




$$4 \times \underline{\quad} = \underline{\quad}$$




$$4 \times \underline{\quad} = \underline{\quad}$$



$$4 \times \underline{\quad} = \underline{\quad}$$



$$4 \times \underline{\quad} = \underline{\quad}$$



$$4 \times \underline{\quad} = \underline{\quad}$$