

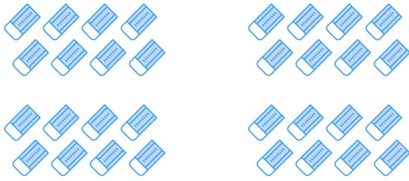
☺ 지우개의 수를 곱셈식으로 나타내세요.



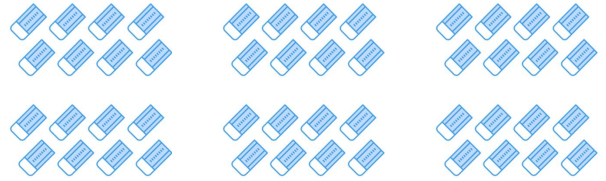
$$8 \times \underline{3} = \underline{24}$$



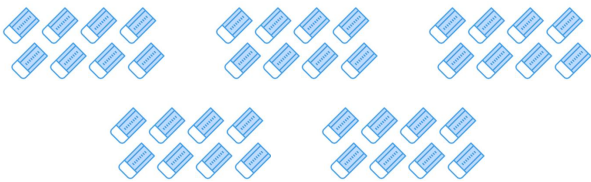
$$8 \times \underline{\quad} = \underline{\quad}$$



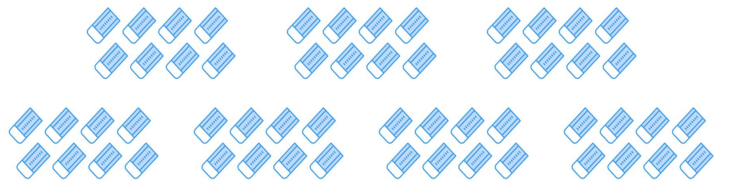
$$8 \times \underline{\quad} = \underline{\quad}$$




$$8 \times \underline{\quad} = \underline{\quad}$$




$$8 \times \underline{\quad} = \underline{\quad}$$



$$8 \times \underline{\quad} = \underline{\quad}$$



$$8 \times \underline{\quad} = \underline{\quad}$$



$$8 \times \underline{\quad} = \underline{\quad}$$