




☺ 동전이 9개씩 쌓여 있습니다. 동전의 수를 곱셈식으로 나타내세요.




$9 \times 2 = 18$




$9 \times \underline{\quad} = \underline{\quad}$




$9 \times \underline{\quad} = \underline{\quad}$




$9 \times \underline{\quad} = \underline{\quad}$




$9 \times \underline{\quad} = \underline{\quad}$



$9 \times \underline{\quad} = \underline{\quad}$



$9 \times \underline{\quad} = \underline{\quad}$



$9 \times \underline{\quad} = \underline{\quad}$