







☺ 당근의 수를 곱셈식으로 나타내세요.

		
$1 \times 4 = 4$	$1 \times 2 = 2$	$1 \times 0 = \underline{\quad}$

		
$1 \times 8 = \underline{\quad}$	$1 \times 9 = \underline{\quad}$	$1 \times 1 = \underline{\quad}$

$1 \times 5 = \underline{\quad}$

$1 \times 6 = \underline{\quad}$

$1 \times 7 = \underline{\quad}$

$0 \times 5 = \underline{\quad}$

$0 \times 6 = \underline{\quad}$

$0 \times 7 = \underline{\quad}$

$5 \times 0 = \underline{\quad}$

$6 \times 0 = \underline{\quad}$

$7 \times 0 = \underline{\quad}$

