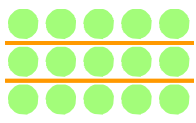




☺ 빈칸에 알맞은 수를 쓰세요. 그리고 두 수를 바꾸어 곱해서 값을 비교해 보세요.




5 개씩 3 묶음
 $5 \times \underline{3} = \underline{15}$






3 개씩 5 묶음
 $3 \times \underline{5} = \underline{15}$

★ 두 수를 바꾸어 곱해도 값은 같습니다.




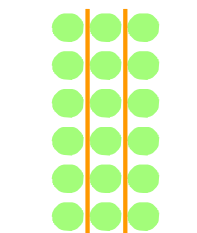
5 개씩 묶음
 $5 \times \underline{ } = \underline{ }$

4 개씩 묶음
 $4 \times \underline{ } = \underline{ }$




3 개씩 묶음
 $3 \times \underline{ } = \underline{ }$

6 개씩 묶음
 $6 \times \underline{ } = \underline{ }$

7 개씩 묶음
 $7 \times \underline{ } = \underline{ }$



2 개씩 묶음
 $2 \times \underline{ } = \underline{ }$

2 개씩 묶음
 $2 \times \underline{ } = \underline{ }$



5 개씩 묶음
 $5 \times \underline{ } = \underline{ }$

