



☺ 크레용의 수를 곱셈식으로 나타내세요.




$$\underline{3} \times \underline{2} = \underline{6}$$



$$\underline{\quad} \times \underline{\quad} = \underline{\quad}$$



$$\underline{\quad} \times \underline{\quad} = \underline{\quad}$$



$$\underline{\quad} \times \underline{\quad} = \underline{\quad}$$

☺ 풍선의 수를 곱셈식으로 나타내세요.



$$\underline{\quad} \times \underline{\quad} = \underline{\quad}$$



$$\underline{\quad} \times \underline{\quad} = \underline{\quad}$$



정답