



☺ 나뭇잎의 수를 곱셈식으로 나타내세요.




$$\underline{3} \times \underline{4} = \underline{12}$$



$$\underline{\quad} \times \underline{\quad} = \underline{\quad}$$




$$\underline{\quad} \times \underline{\quad} = \underline{\quad}$$




$$\underline{\quad} \times \underline{\quad} = \underline{\quad}$$

☺ 꽃의 수를 곱셈식으로 나타내세요.



$$\underline{\quad} \times \underline{\quad} = \underline{\quad}$$



$$\underline{\quad} \times \underline{\quad} = \underline{\quad}$$

