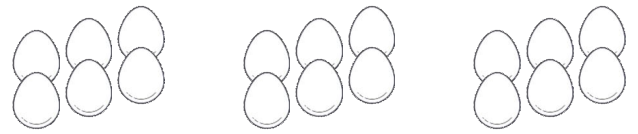


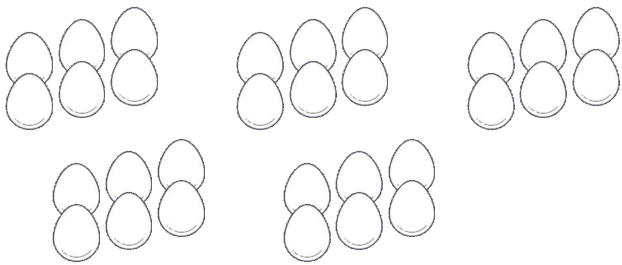
☺ 달걀의 수를 곱셈식으로 나타내세요.




6 × 2 = 12



___ × ___ = ___




___ × ___ = ___



___ × ___ = ___

☺ 블럭의 수를 곱셈식으로 나타내세요.



___ × ___ = ___



___ × ___ = ___

