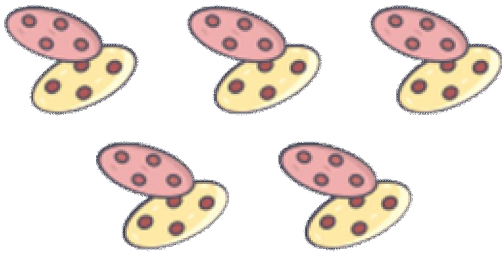


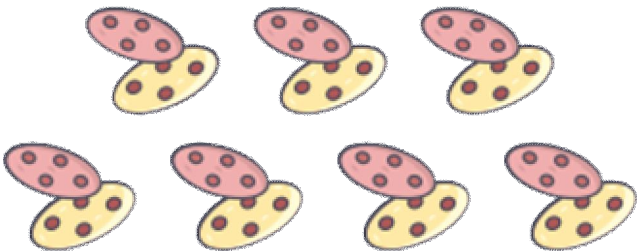
☺ 과자의 수를 곱셈식으로 나타내세요.




2 × 5 = 10



___ × ___ = ___



___ × ___ = ___



___ × ___ = ___

☺ 초콜릿의 수를 곱셈식으로 나타내세요.



___ × ___ = ___



___ × ___ = ___

