

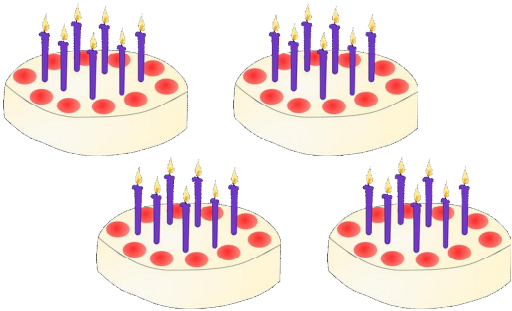
☺ 양초의 수를 곱셈식으로 나타내세요.




$$\underline{7} \times \underline{2} = \underline{14}$$



$$\underline{\quad} \times \underline{\quad} = \underline{\quad}$$




$$\underline{\quad} \times \underline{\quad} = \underline{\quad}$$




$$\underline{\quad} \times \underline{\quad} = \underline{\quad}$$

☺ 젤리의 수를 곱셈식으로 나타내세요.



$$\underline{\quad} \times \underline{\quad} = \underline{\quad}$$



$$\underline{\quad} \times \underline{\quad} = \underline{\quad}$$

