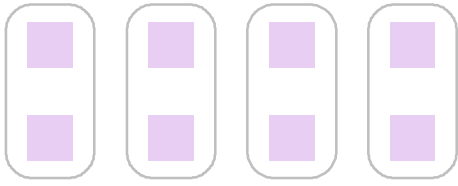
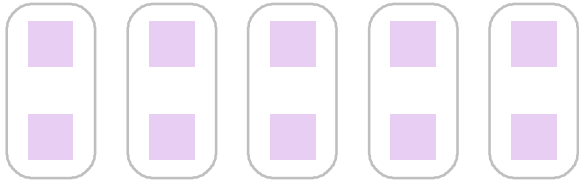


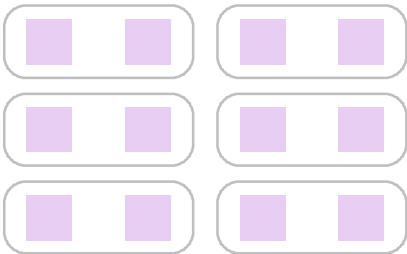
■의 개수는 2의 몇 배인지 쓰고, 곱셈으로 나타내세요.



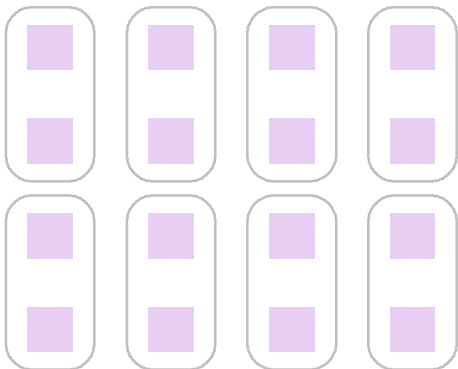
2씩 4 묶음 → 2의 4 배 → 2×4
2 곱하기 4




2씩 5 묶음 → 2의 배 → $2 \times$
2 곱하기 5



2씩 묶음 → 2의 배 → ×



2씩 묶음 → 2의 배 →



2씩 묶음 → 2의 배 →

