




●의 개수는 3의 몇 배인지 쓰고, 곱셈으로 나타내세요.




3씩 2 묶음 → 3의 2 배 → 3×2
3 곱하기 2






3씩 3 묶음 → 3의 배 → $3 \times$
3 곱하기 3





3씩 묶음 → 3의 배 → ×



3씩 묶음 → 3의 배 →



3씩 묶음 → 3의 배 →



정답