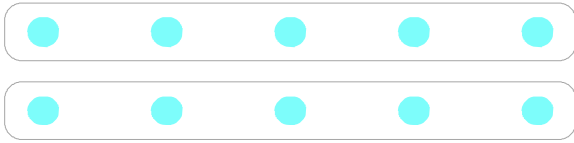
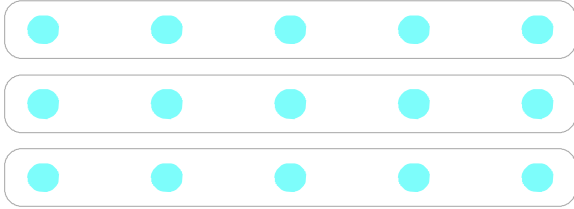


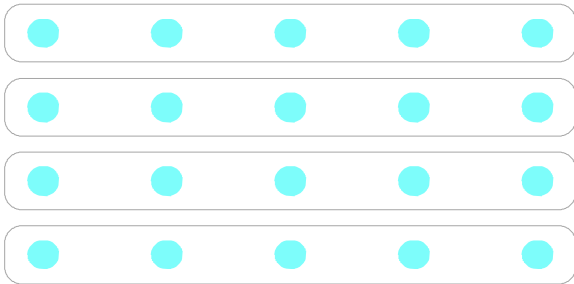
●의 개수는 5의 몇 배인지 쓰고, 곱셈으로 나타내세요.



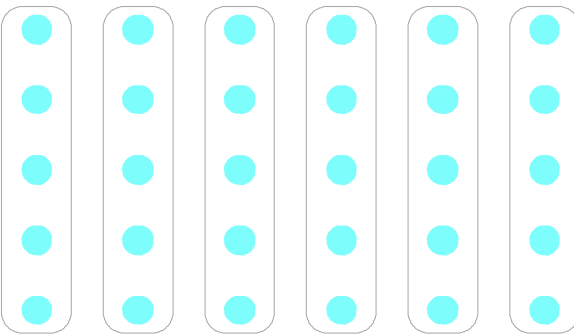
5씩 2 묶음 → 5의 2 배 → 5×2
5 곱하기 2




5씩 3 묶음 → 5의 배 → $5 \times$
5 곱하기 3



5씩 묶음 → 5의 배 → ×



5씩 묶음 → 5의 배 →



5씩 묶음 → 5의 배 →

