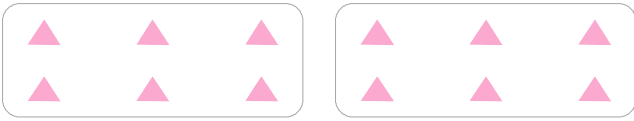



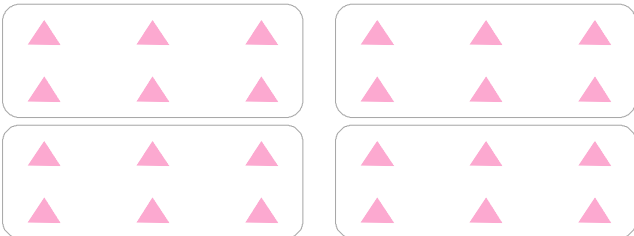
▲의 개수는 6의 몇 배인지 쓰고, 곱셈으로 나타내세요.



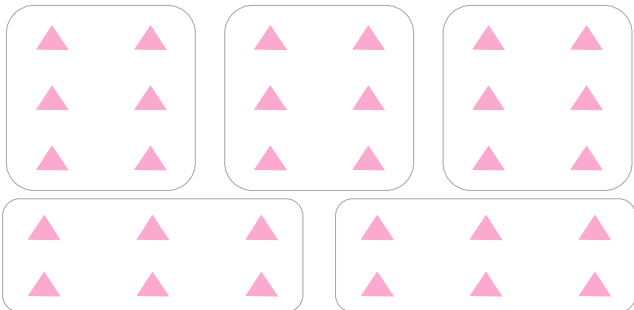
6씩 2 묶음 → 6의 2 배 → 6×2
6 곱하기 2



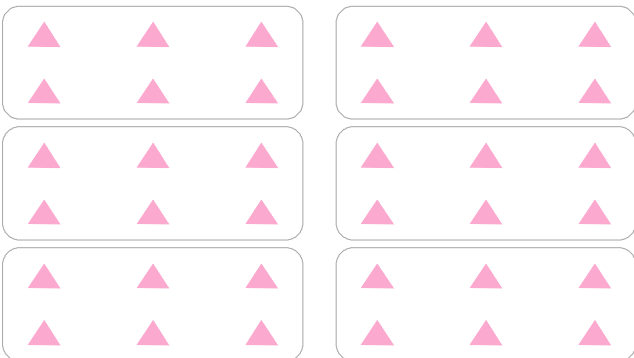
6씩 3 묶음 → 6의 배 → $6 \times$
6 곱하기 3



6씩 묶음 → 6의 배 → ×



6씩 묶음 → 6의 배 →



6씩 묶음 → 6의 배 →

