
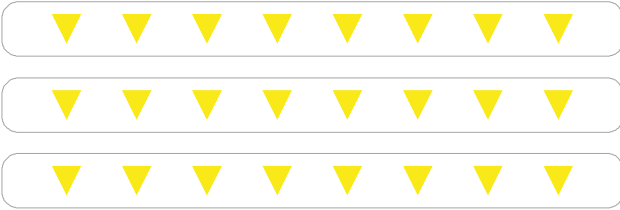


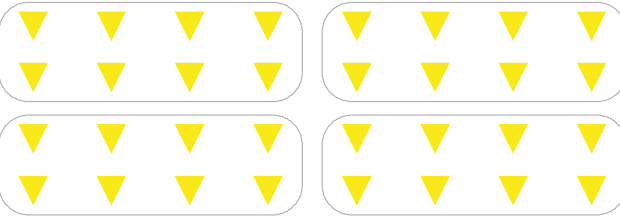
▼의 개수는 8의 몇 배인지 쓰고, 곱셈으로 나타내세요.




8씩 2 묶음 → 8의 2 배 → 8×2
8 곱하기 2




8씩 3 묶음 → 8의 배 → $8 \times$
8 곱하기 3



8씩 묶음 → 8의 배 → ×



8씩 묶음 → 8의 배 →



8씩 묶음 → 8의 배 →

