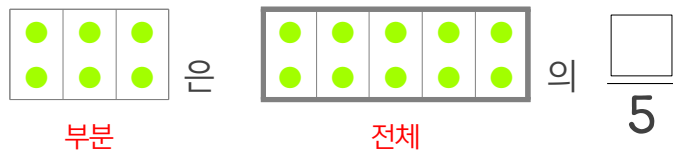
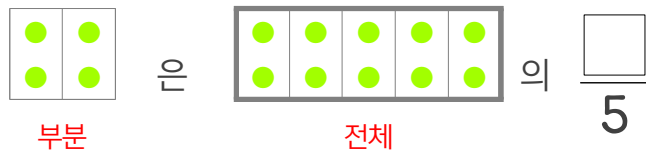
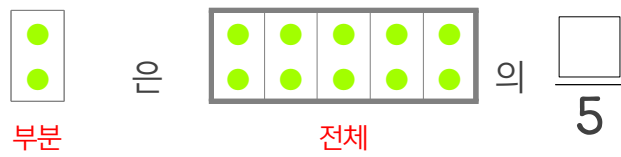
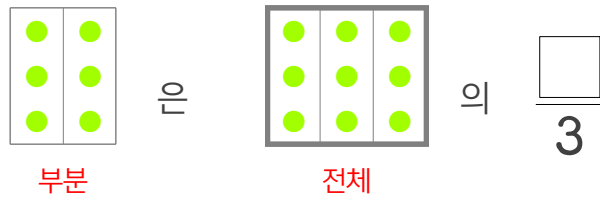
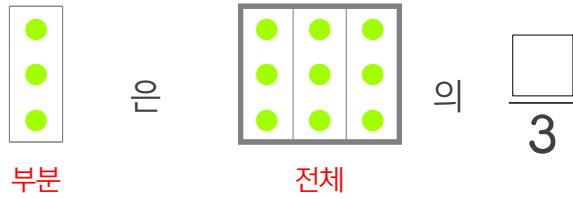
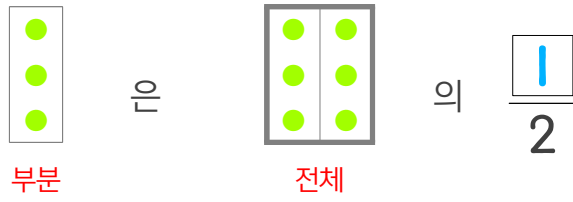


☺ 빈칸에 알맞은 수를 쓰세요.



3은 6의 $\frac{\square}{2}$

3은 9의 $\frac{\square}{3}$

6은 9의 $\frac{\square}{3}$

2는 10의 $\frac{\square}{5}$

6은 10의 $\frac{\square}{5}$

8은 10의 $\frac{\square}{5}$

