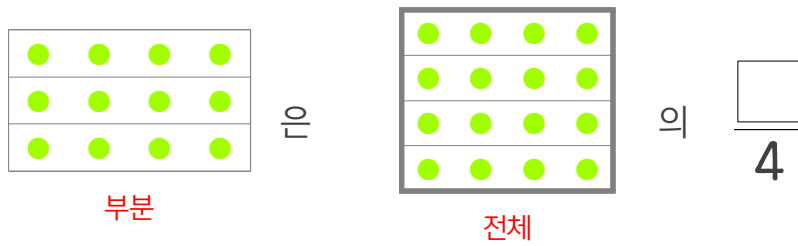
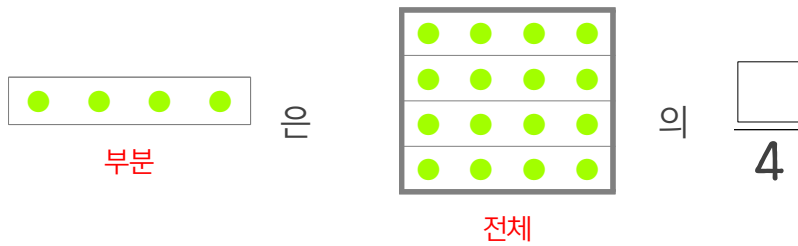
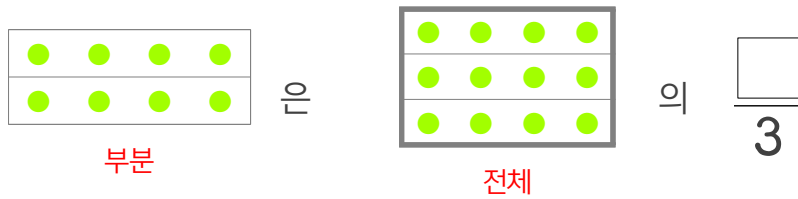
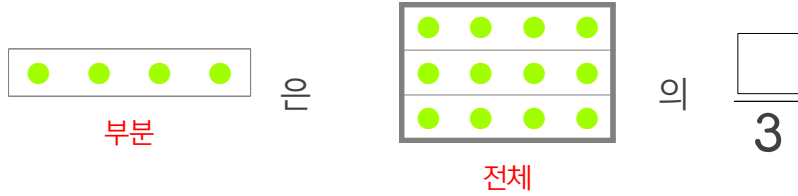



☺ 빈칸에 알맞은 수를 쓰세요.



4는 8의  $\frac{\square}{2}$

4는 12의  $\frac{\square}{3}$

8은 12의  $\frac{\square}{3}$

4는 16의  $\frac{\square}{4}$

8은 16의  $\frac{\square}{4}$

12는 16의  $\frac{\square}{4}$

