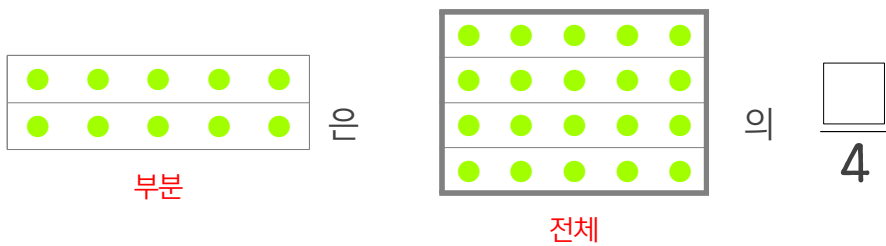
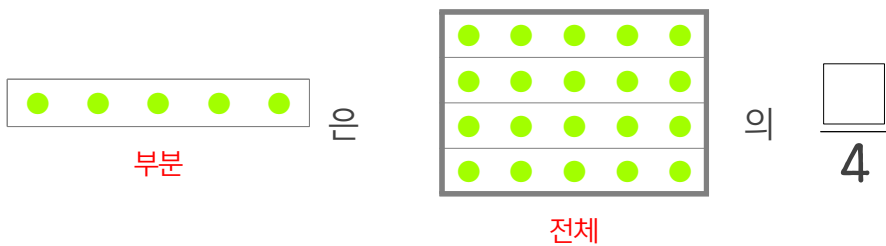
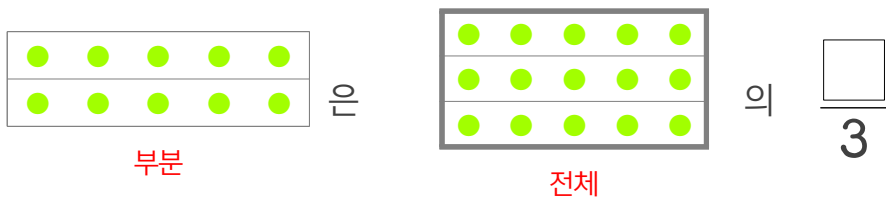
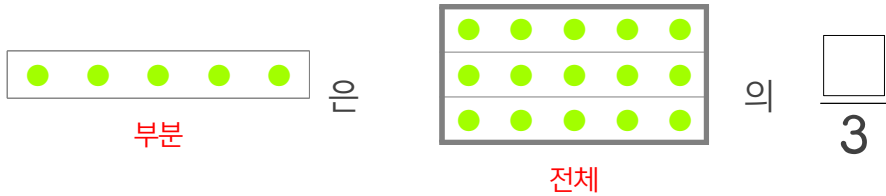
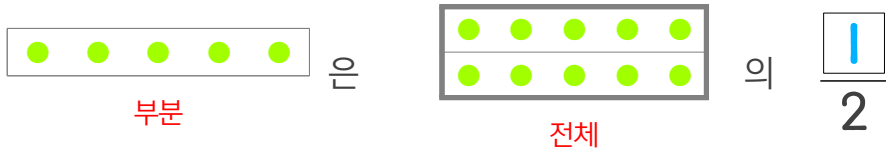


☺ 빈칸에 알맞은 수를 쓰세요.



5는 10의  $\frac{\square}{2}$

5는 15의  $\frac{\square}{3}$

10은 15의  $\frac{\square}{3}$

5는 20의  $\frac{\square}{4}$

10은 20의  $\frac{\square}{4}$

15는 20의  $\frac{\square}{4}$

