
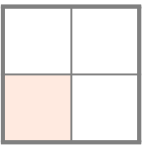



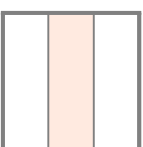



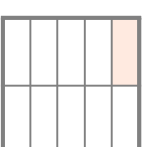
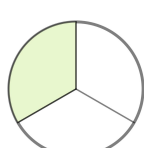
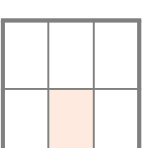
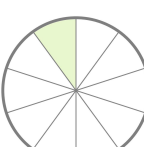
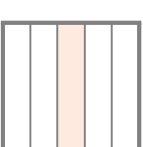


☺ 같은 분수를 나타내는 그림끼리 선으로 이어 보세요. 그리고 분수와도 선으로 이어 보세요.

		$\frac{1}{6}$
		$\frac{1}{2}$
		$\frac{1}{8}$
		$\frac{1}{3}$
		$\frac{1}{4}$
		$\frac{1}{5}$
		$\frac{1}{10}$

Hand-drawn blue lines connect the first circle to the square with 3 vertical strips (representing 1/3), and the square with 10 vertical strips to the fraction 1/10.

