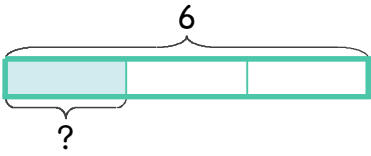
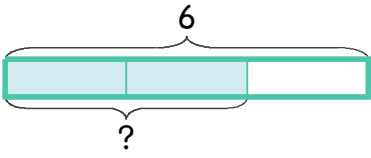
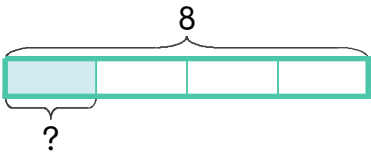
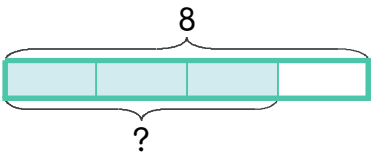


☺ 빈칸에 알맞은 수를 쓰세요.

6의 $\frac{1}{3}$ 은  $6 \div 3 = \underline{2}$

6의 $\frac{2}{3}$ 는  1 칸: $6 \div 3 = \underline{2}$
2 칸: $2 \times 2 = \underline{\quad}$

8의 $\frac{1}{4}$ 은  $8 \div 4 = \underline{\quad}$

8의 $\frac{3}{4}$ 은  1 칸: $8 \div 4 = \underline{\quad}$
2 칸: $2 \times 3 = \underline{\quad}$

10의 $\frac{1}{5}$ 은? $\underline{\quad}$

12의 $\frac{1}{6}$ 은? $\underline{\quad}$

10의 $\frac{2}{5}$ 는? $\underline{\quad}$

12의 $\frac{2}{6}$ 는? $\underline{\quad}$

10의 $\frac{4}{5}$ 는? $\underline{\quad}$

12의 $\frac{5}{6}$ 는? $\underline{\quad}$

정답

