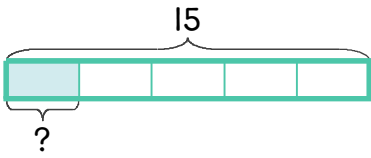
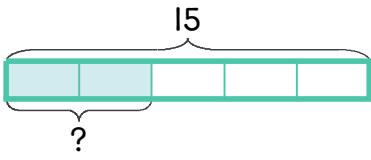
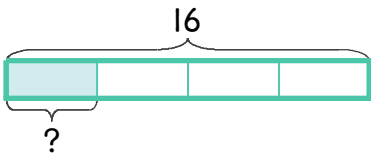
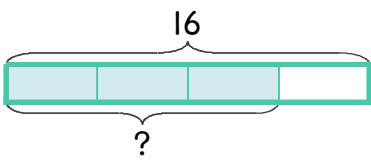


☺ 빈칸에 알맞은 수를 쓰세요.

15의 $\frac{1}{5}$ 은  $15 \div 5 = \underline{3}$

15의 $\frac{2}{5}$ 는  1 칸: $15 \div 5 = \underline{3}$
2 칸: $3 \times 2 = \underline{\quad}$

16의 $\frac{1}{4}$ 은  $16 \div 4 = \underline{\quad}$

16의 $\frac{3}{4}$ 은  1 칸: $16 \div 4 = \underline{\quad}$
2 칸: $4 \times 3 = \underline{\quad}$

25의 $\frac{1}{5}$ 은? $\underline{\quad}$

20의 $\frac{1}{4}$ 은? $\underline{\quad}$

25의 $\frac{2}{5}$ 는? $\underline{\quad}$

20의 $\frac{2}{4}$ 는? $\underline{\quad}$

25의 $\frac{4}{5}$ 는? $\underline{\quad}$

20의 $\frac{3}{4}$ 은? $\underline{\quad}$

정답

