


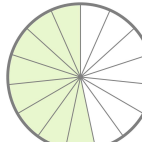

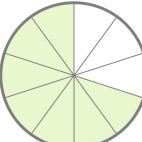

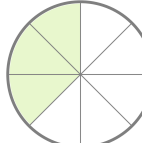

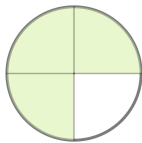

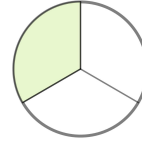
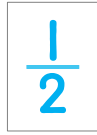
☺ 색칠한 부분과 색칠하지 않은 부분을 각각 분수로 나타내세요.

색칠한 부분

색칠하지 않은 부분

색칠한 부분

색칠하지 않은 부분



과



을/를 합하면 전체(1)이 됩니다.



과



을/를 합하면 전체(1)이 됩니다.

정답

