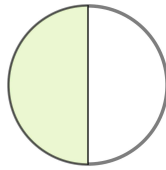
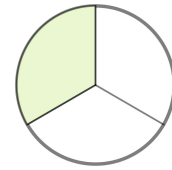


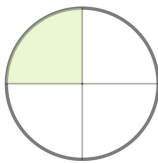
☺ 색칠한 부분을 분수로 나타내세요.

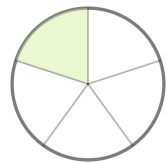


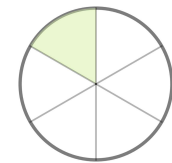
1

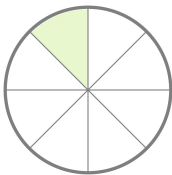


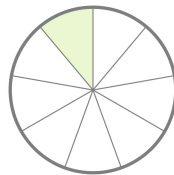


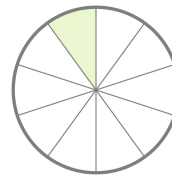


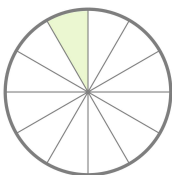


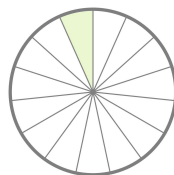


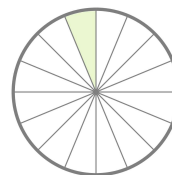













☺ 색칠한 부분과 같이 분자가 1인 분수를 무엇이라고 하나요? \_\_\_\_\_

정답

