
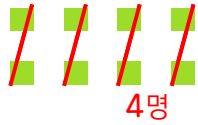


과자 8개를



한 명에게 2개씩 주면

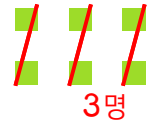


$$8 \div 2 = \underline{4}$$

과자 6개를



한 명에게 2개씩 주면

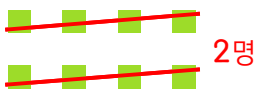


$$6 \div 2 = \underline{\quad}$$

과자 8개를



한 명에게 4개씩 주면

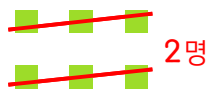


$$8 \div 4 = \underline{\quad}$$

과자 6개를



한 명에게 3개씩 주면

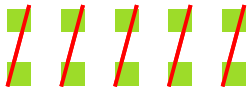


$$6 \div 3 = \underline{\quad}$$

과자 10개를




한 명에게 2개씩 주면

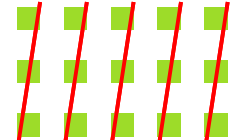


$$10 \div 2 = \underline{\quad}$$

과자 15개를



한 명에게 3개씩 주면

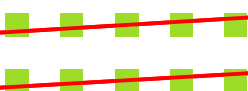


$$15 \div 3 = \underline{\quad}$$

과자 10개를




한 명에게 5개씩 주면

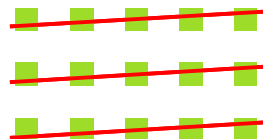


$$10 \div 5 = \underline{\quad}$$

과자 15개를



한 명에게 5개씩 주면



$$15 \div 5 = \underline{\quad}$$

