
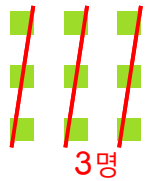


과자 9개를




한 명에게 3개씩 주면

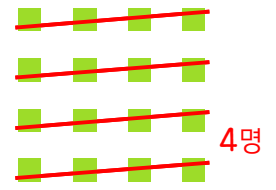


$$9 \div 3 = \underline{3}$$

과자 16개를




한 명에게 4개씩 주면

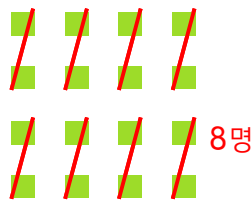


$$16 \div 4 = \underline{\quad}$$

과자 16개를




한 명에게 2개씩 주면

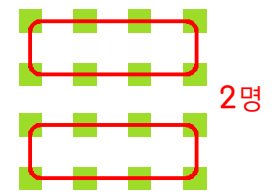


$$16 \div 2 = \underline{\quad}$$

과자 16개를



한 명에게 8개씩 주면

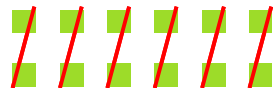


$$16 \div 8 = \underline{\quad}$$

과자 12개를



한 명에게 2개씩 주면

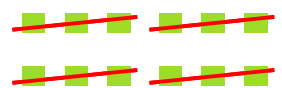


$$12 \div 2 = \underline{\quad}$$

과자 12개를



한 명에게 3개씩 주면




$$12 \div 3 = \underline{\quad}$$

과자 12개를



한 명에게 4개씩 주면

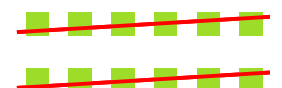


$$12 \div 4 = \underline{\quad}$$

과자 12개를



한 명에게 6개씩 주면



$$12 \div 6 = \underline{\quad}$$

