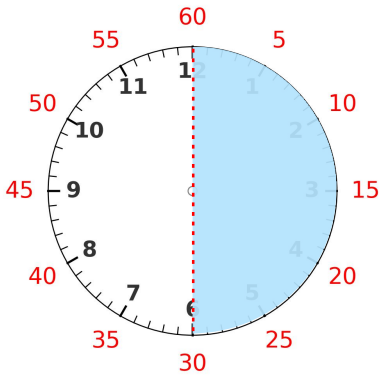
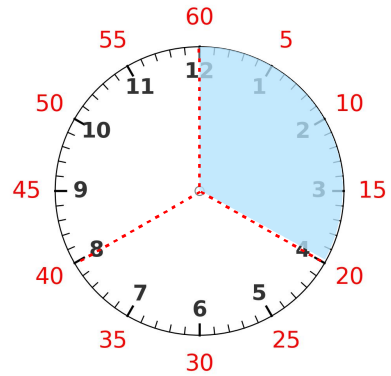


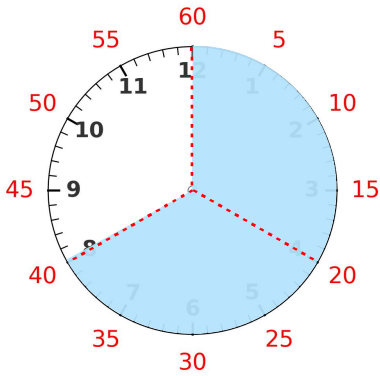
☺ 빈칸에 알맞은 수를 쓰세요.



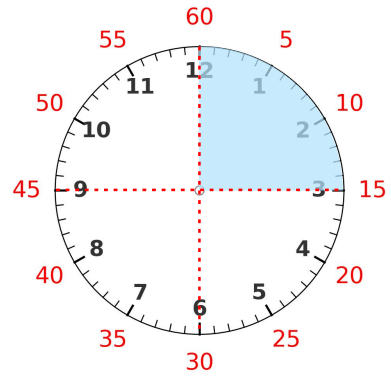
1시간(60분)의 $\frac{1}{2}$ 은? **30** 분



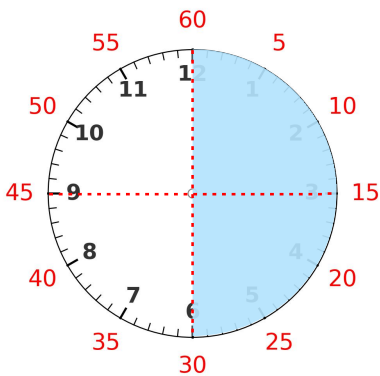
1시간(60분)의 $\frac{1}{3}$ 은? _____ 분



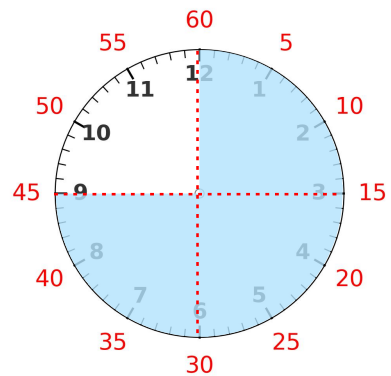
1시간(60분)의 $\frac{2}{3}$ 는? _____ 분



1시간(60분)의 $\frac{1}{4}$ 은? _____ 분



1시간(60분)의 $\frac{2}{4}$ 는? _____ 분



1시간(60분)의 $\frac{3}{4}$ 은? _____ 분

정답

