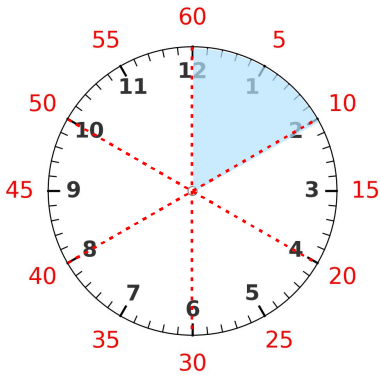
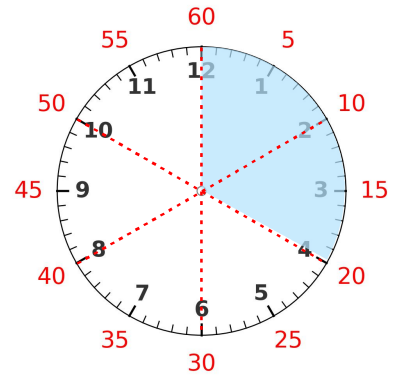


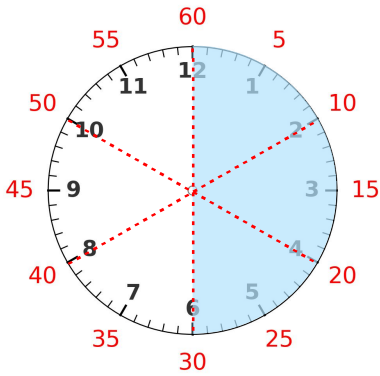
☺ 빈칸에 알맞은 수를 쓰세요.



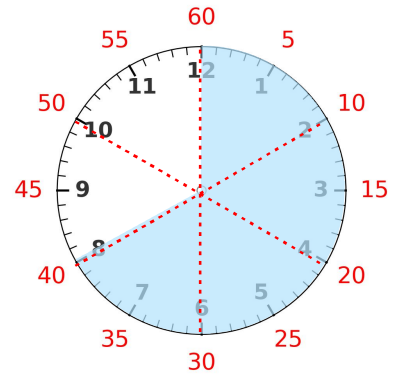
1시간(60분)의 $\frac{1}{6}$ 은? **10** 분



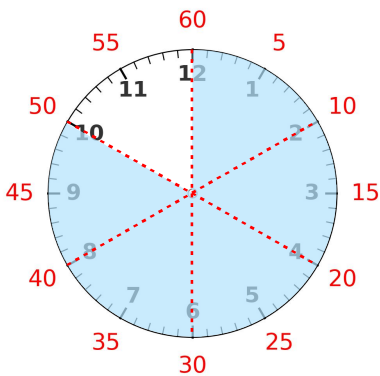
1시간(60분)의 $\frac{2}{6}$ 는? _____ 분



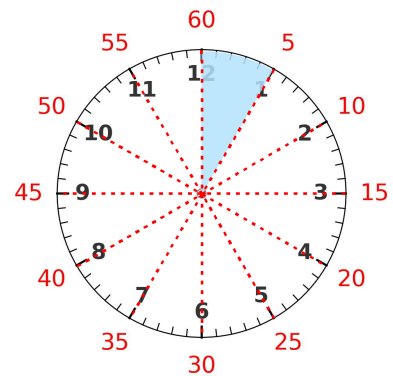
1시간(60분)의 $\frac{3}{6}$ 은? _____ 분



1시간(60분)의 $\frac{4}{6}$ 는? _____ 분



1시간(60분)의 $\frac{5}{6}$ 는? _____ 분



1시간(60분)의 $\frac{1}{12}$ 은? _____ 분

