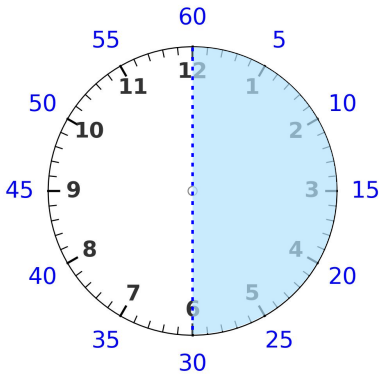
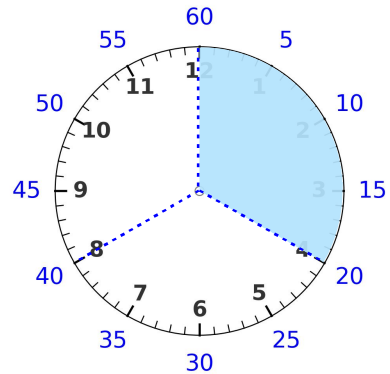


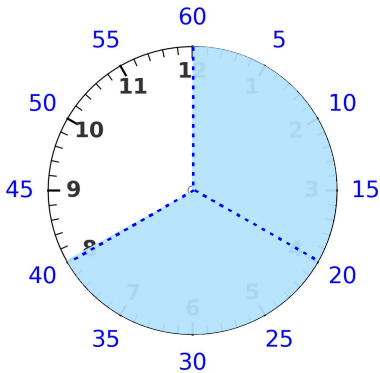
☺ 빈칸에 알맞은 수를 쓰세요.



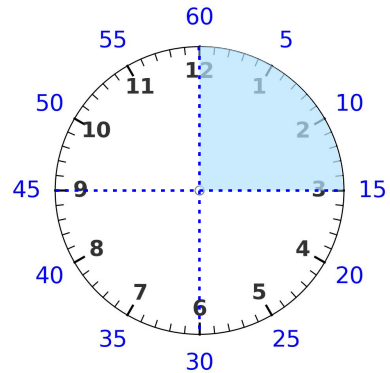
1분(60초)의  $\frac{1}{2}$ 은? **30** 초



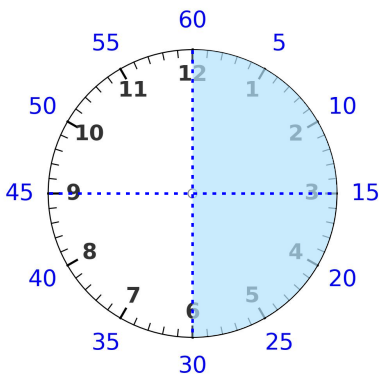
1분(60초)의  $\frac{1}{3}$ 은? \_\_\_\_\_ 초



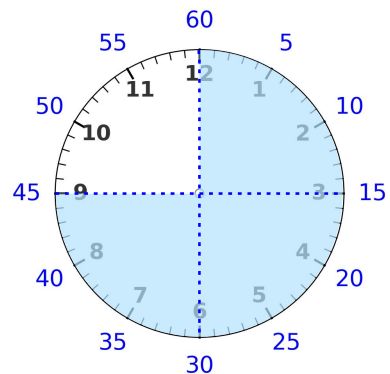
1분(60초)의  $\frac{2}{3}$ 는? \_\_\_\_\_ 초



1분(60초)의  $\frac{1}{4}$ 은? \_\_\_\_\_ 초



1분(60초)의  $\frac{2}{4}$ 는? \_\_\_\_\_ 초



1분(60초)의  $\frac{3}{4}$ 은? \_\_\_\_\_ 초

