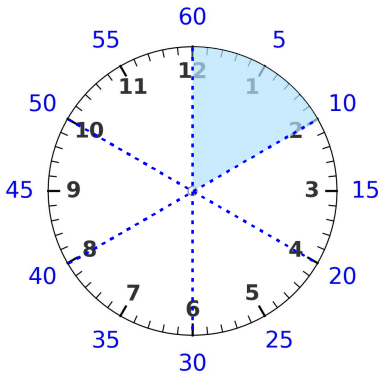
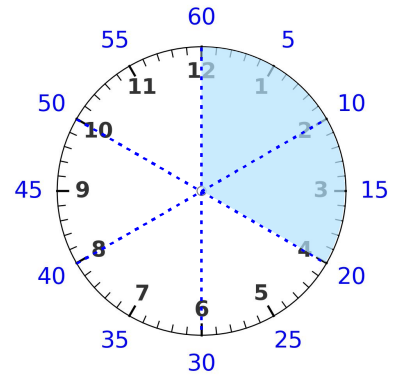


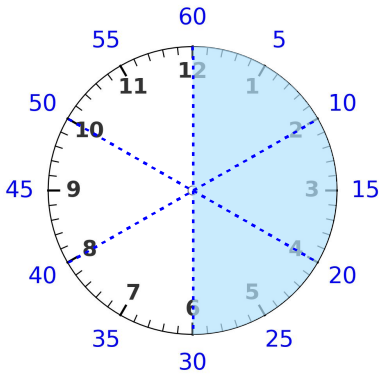
☺ 빈칸에 알맞은 수를 쓰세요.



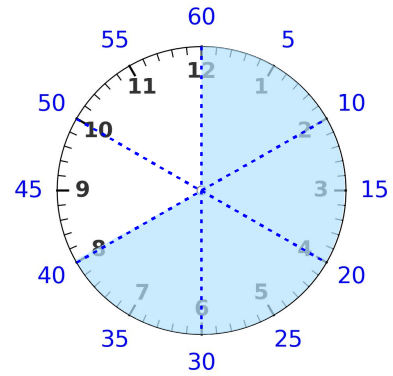
1분(60초)의  $\frac{1}{6}$ 은? 10 초



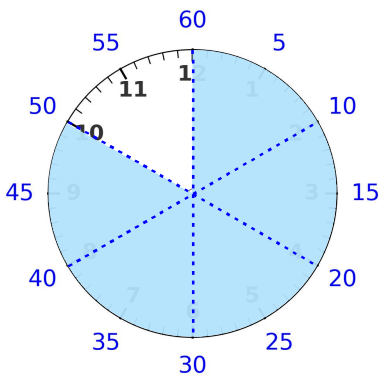
1분(60초)의  $\frac{2}{6}$ 는? \_\_\_\_\_ 초



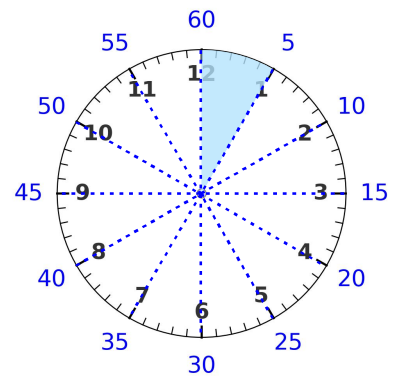
1분(60초)의  $\frac{3}{6}$ 은? \_\_\_\_\_ 초



1분(60초)의  $\frac{4}{6}$ 는? \_\_\_\_\_ 초



1분(60초)의  $\frac{5}{6}$ 는? \_\_\_\_\_ 초



1분(60초)의  $\frac{1}{12}$ 은? \_\_\_\_\_ 초

